

I. Numerals 181-190:

(5)

--	--	--	--	--	--	--	--	--	--

II. Write in Ascending order:

2x2½=5

a.

	4	1	3	2	5

b.

	7	8	10	9	6

III. Comparison <, >, =

3x1=3

a.

	41		49
--	----	--	----

b.

	16		50
--	----	--	----

c.

	22		22
--	----	--	----

IV. Backward count (10-1)

(5)

--	--	--	--	--	--	--	--	--	--

V. Write before, after and between numbers:

3x1=3

a. _____ 25

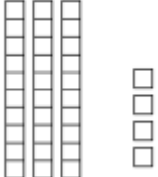
b. 76 _____

c. 9 _____ 11

VI. Write the place value:

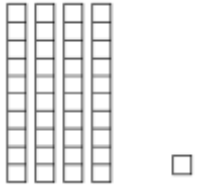
2x2½=5

a.



_____ tens _____ ones = _____

b.




_____ tens _____ ones = _____

VII. Addition using Number line:

(4)

a. $4 + 3 =$



Conversation

10 Marks

Answer the following:

5x2=10

1. How many hands does a clock have?
2. _____ help us to know the time.
3. Which hand shows the second?
4. Tell any two numbers in a clock?
5. The small hand shows the _____.