

Name: \_\_\_\_\_

MATHS WRITTEN

UKG

I. Write Numerals (131-140)

(10)

--	--	--	--	--	--	--	--	--	--

II. Write the number names:

4x1=4

a. 50 - \_\_\_\_\_

b. 12 - \_\_\_\_\_

c. 25 - \_\_\_\_\_

d. 30 - \_\_\_\_\_




III. Backward counting (10-1)




(5)




--	--	--	--	--	--	--	--	--	--




IV. Picture Addition:

2x2=4

1.  +  = 

2.  +  = 

IV. Write Before, After and Between numbers:

$4 \times 1 = 4$

a. 

17		19
----	--	----

b. 

10		12
----	--	----

c. 

5	6	
---	---	--

d. 

	16	17
--	----	----

V. Circle the bigger number:

$3 \times 1 = 3$

a. 

7	10
---	----

b. 

12	15
----	----

c. 

10	20
----	----

VI. Comparison (<, > or =)

$6 \times \frac{1}{2} = 3$

a. 

5		7
---	--	---

b. 

13		13
----	--	----

c. 

4		16
---	--	----

d. 

19		17
----	--	----

e. 

8		12
---	--	----

f. 

15		17
----	--	----

VII. Write the missing numbers

7

10					60				100
----	--	--	--	--	----	--	--	--	-----