

09.12.19

SUMMATIVE ASSESSMENT-2

Marks : 80

Name : _____

MATHS

Std-I _____

I. Write Numerals from 531 to 540:

(10)

--	--	--	--	--	--	--	--	--	--

II. Write the number names:

5x2=10

a. 35 - _____

d. 63 - _____

b. 49 - _____

e. 70 - _____

c. 52 - _____

III. Fill in the missing numbers.

5x2=10

a. 224, _____, _____, 227

b. 304, _____, 306, _____

c. 465, _____, _____, 468

d. 511, 512, _____, _____

e. 547, _____, _____, 550

IV. See the picture and tick the correct answer:

5x1=5

1. Which glass has more water?

2. Which candle is thin?





3. Which pencil is long?



4. Which vegetable is heavier?



5. Which is taller?



V. Fill in the blanks with patterns:

2x1=2

a. ○ △ ○ _____, _____

b. □ ○ △ □ ○ △ _____, _____

VI. Fill in the blanks:

4x1=4

a. Circle has _____ sides.

b. Square has _____ corners.

c. Triangle has _____ sides.

d. What is the shape of a bangle? _____.


VII. Match the following:


5x1=5

a.  - Cone

b.  - Square

c.  - Circle

d.  - Rectangle

e.  - Triangle




VIII. Draw the given shapes:

3x1=3

a. Triangle

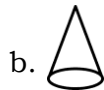

b. Cylinder

c. Square



IX. Name the given shapes:

3x1=3



X. Addition:

4x2=8

a. $3 \quad 1$

b. $4 \quad 2$

c. $3 \quad 6$

d. $5 \quad 0$

$\begin{array}{r} + 2 \quad 4 \\ \hline \end{array}$

$\begin{array}{r} + 2 \quad 4 \\ \hline \end{array}$

$\begin{array}{r} + 3 \quad 0 \\ \hline \end{array}$

$\begin{array}{r} + 2 \quad 6 \\ \hline \end{array}$

XI. Write skip counting by 4's:

5x1=5

a. 4, _____, _____, 16

b. 36, _____, _____, _____, 52

XII. Table – 5

5 marks

XIII. Hots: Choose the correct answer:

5x2=10

a. What is the shape of a scale? _____.

- a. Circle b. Rectangle c. Square

b. How many fingers in your left hand? _____.

- a. five b. four c. two

c. What is the sum of $5 + 0 =$ _____.

- a. zero b. five c. three

d. Which is the tallest animal? _____

- a. Goat b. Snail c. Camel

e. Which is the between number of 523 _____ 525.

- a. 524 b. 522 c. 526