

09.12.19

SUMMATIVE ASSESSMENT-2

Marks : 40

Name : \_\_\_\_\_

MATHS

LKG \_\_\_\_\_

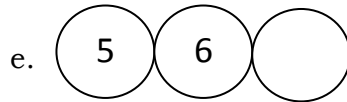
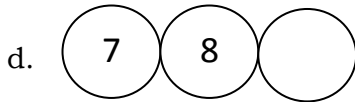
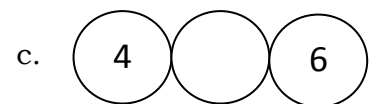
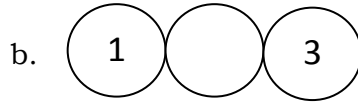
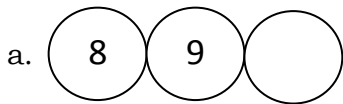
I. Write the sequence (11-20)

(10)

--	--	--	--	--	--	--	--	--	--

II. Write the between and after numbers:

5x1=5



III. Write the missing number in the sequence:


5


10			7		5		3		1
----	--	--	---	--	---	--	---	--	---


IV. Count and write:

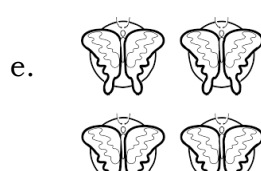
5x2=10











V. Circle the biggest object in each row:

5x2=10

