

I. Complete the sequence (11-20)

(10)

--	--	--	--	--	--	--	--	--	--

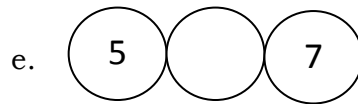
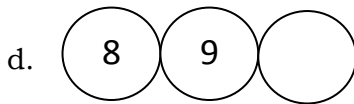
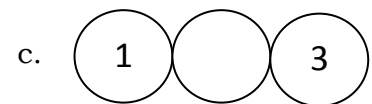
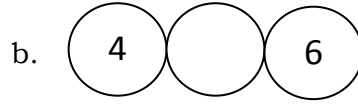
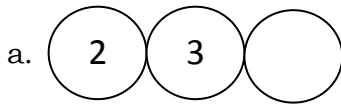
II. Write the missing numbers:

(5)

1			4		6		8		10
---	--	--	---	--	---	--	---	--	----

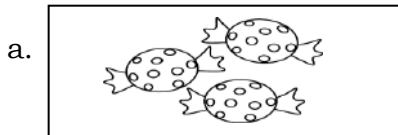
III. Write the between and after numbers:

5x1=5

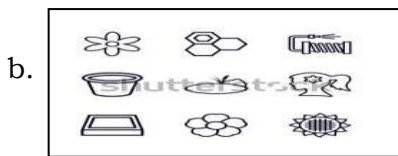


IV. Count and write:

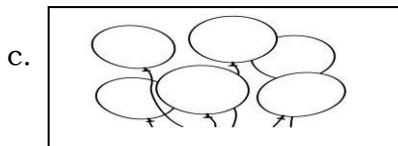
5x2=10



= \_\_\_\_\_



= \_\_\_\_\_



= \_\_\_\_\_



= \_\_\_\_\_



= \_\_\_\_\_

## Maths Oral

Marks -10

I. Say Backward count (10-0)

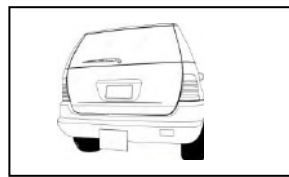



(3)

II. Tell numbers 35 to 45

(5)

III. Identify:

(2)



## Conversation

(10marks)

I. Answer the following:

1. Who is called the Father of Computer?
2. When you hurt someone what you will say?
3. \_\_\_\_\_ is an electronic device.
4. Name any two parts of the computer.
5. When you receive something say \_\_\_\_\_.