

01.11.19

Pre FA-2 Contest

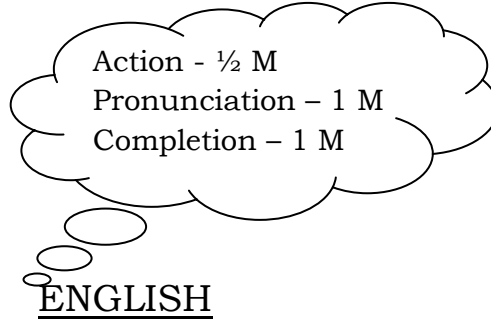
LKG

Marks :20

2x2½=5

I. Say the following:

1. Orange and Lemon
2. பாரதியார்



I. Dictation:

3x1=3

1.

2.

3.

II. Say the Opposites:

2x1=2

1. Give x _____
2. Hot x _____

MATHS

I. Tell the numbers 36 to 45

(2)

II. Identify the numbers:

3x1=3

19	11	7
----	----	---

TAMIL

I. Dictation:

(2)


1.


2.

II. Identify the pictures and letters:

3x1=3

1.

இ	
---	---
2.

அ	
---	---
3.

ஓ	9
---	---