

12.09.19

SUMMATIVE ASSESSMENT-1

Marks : 80

Name : _____

EVS

Std-II _____

I. Fill in the blanks:

6x2=12

1. There are _____ bones in our body.
2. _____ is a flat land area.
3. _____ is called the ship of the desert.
4. The main bone in our head is called the _____.
5. Shrubs are _____ than trees.
6. _____ is used as an ornamental plant.

II. Match the following:

5x1=5

- | | | |
|-----------|---|---------|
| 1. Sugar | - | Lion |
| 2. Forest | - | Sweet |
| 3. Grapes | - | Camel |
| 4. Chilli | - | Climber |
| 5. Desert | - | Spicy |

III. Choose the correct answer:

5x1=5

1. Winnow is got from _____.
 a. Palm tree b. Neem tree c. Bamboo plant
2. This is a spice _____.
 a. Bay leaf b. Banana leaf c. Greens
3. The _____ are the green part of a plant.
 a. root b. leaves c. flower
4. The cuckoo makes a musical _____.
 a. sound b. smell c. feel
5. Elephants have a _____.
 a. stripe b. trunk c. spots

IV. Write True or False:

5x1=5

1. Lions and tigers are found in the forest. _____
2. Tongue helps us to hear the sound. _____
3. Plants are of different kinds. _____
4. The horse is called the "Ship of the desert". _____
5. Camels carry heavy loads. _____

V. Answer in one word:

6x1=6

1. What a giraffe eats? _____
2. The home of a hen _____
3. Trees that give us paper _____
4. The fruit that has only one seed _____
5. The Tamil name for cardamom _____
6. The home of a mole _____

VI. Name the following:


3x2=6

1. Name any two birds.
_____, _____
2. Name any two sense organs.
_____, _____
3. Name any two trees.
_____, _____

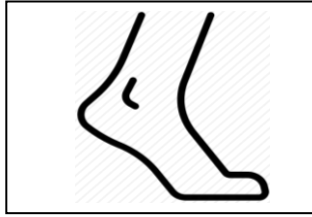
VII. Name the pictures:
(Elbow, Desert, Ankle)

3x1=3

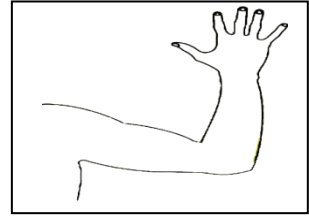
1.



2.



3.



VIII. Answer the following:

6x3=18

1. Which is the hardest part in our body?

Ans: _____

2. What is a Desert?

Ans: _____

3. What do we get from bee hive?

Ans: _____

4. Where do wild animals live?

Ans: _____

5. Write the uses of coconut oil?






Ans: _____

6. Write any three landforms.

Ans: _____

IX. Match the Pictures:

5x1=5



X. Diagram: Draw a plant and label any 3 parts:

(5)

