

09.09.19

SUMMATIVE ASSESSMENT-1

Marks : 40

Name : _____

MATHS

LKG _____

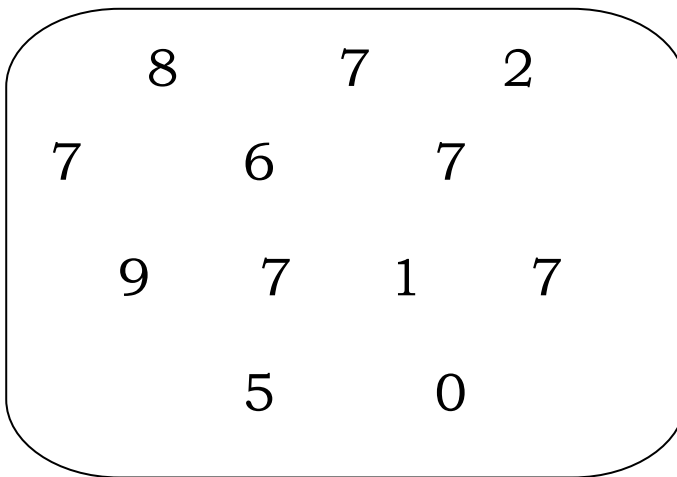
I. Write Numerals (1-10)

(10)

--	--	--	--	--	--	--	--	--	--

II. Circle the number 7.


5x1=5



III. Count and write:

5x2=10


a.



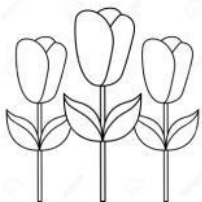
b.



c.



d.


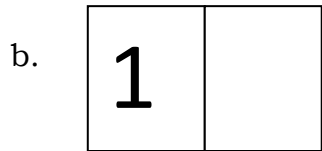
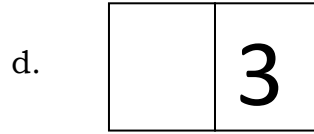



e.



V. Fill up:

5X1=5



V. Match:

(10)

